

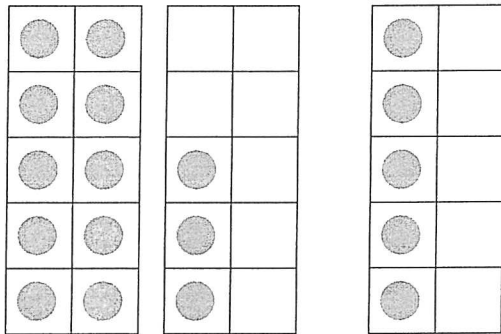
8. L'addition et la soustraction jusqu'à 20

Activité 3

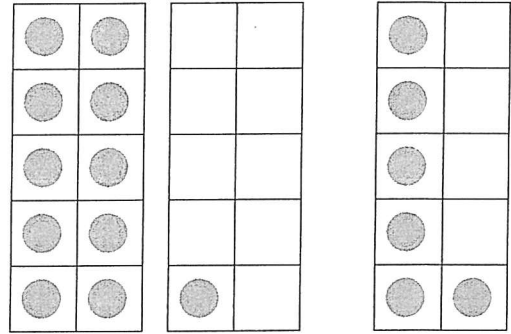
Séance 63 - Additionnons en décomposant le plus grand nombre

1 Additionne.

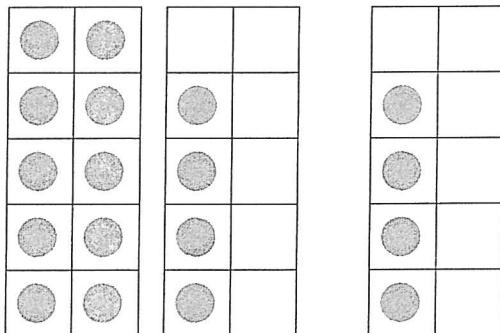
a) $13 + 5 = \square$



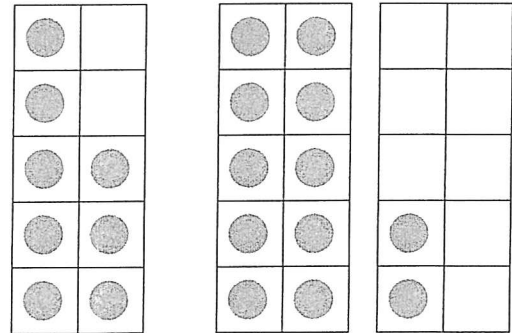
b) $11 + 6 = \square$



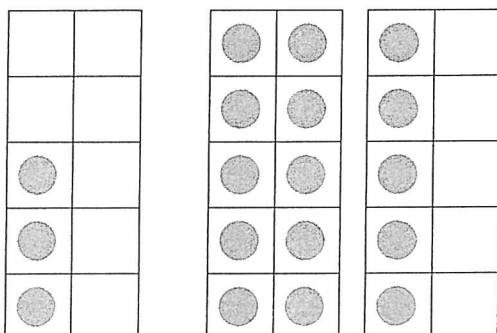
c) $14 + 4 = \square$



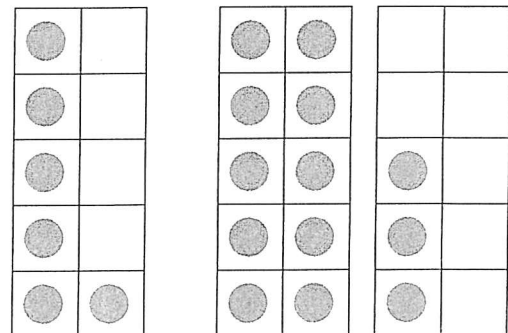
d) $8 + 12 = \square$



e) $3 + 15 = \square$



f) $6 + 13 = \square$



2 Complète les égalités.

a) $17 + 2 = \square$

$\begin{array}{r} 17 + 2 \\ \swarrow \quad \searrow \\ 10 \quad 7 \end{array}$	$7 + 2 = \square$ $10 + \square = \square$
--	---

b) $13 + 3 = \square$

$\begin{array}{r} 13 + 3 \\ \swarrow \quad \searrow \\ 10 \quad 3 \end{array}$
--

c) $3 + 14 = \square$

$\begin{array}{r} 3 + 14 \\ \swarrow \quad \searrow \\ 10 \quad 4 \end{array}$
--

d) $6 + 12 = \square$

$\begin{array}{r} 6 + 12 \\ \swarrow \quad \searrow \\ \square \quad \square \end{array}$

e) $5 + 14 = \square$

$\begin{array}{r} 5 + 14 \\ \swarrow \quad \searrow \\ \square \quad \square \end{array}$
